

AQA GCSE Chemistry (Combined Science) Unit 6: The Rate and Extent of Chemical Change

Calculating Rates of Reactions

Reactions happen at **varying rates**. For example, a firework exploding is a fast reaction whereas a piece of iron rusting would take place over a longer period of time.

The **rate of a chemical reaction** tells us how quickly a **product is formed** or how quickly a **reactant is used up**.

For a chemical reaction to occur, the reactant particles must collide with enough energy. Those collisions that produce a chemical reaction are called successful collisions.


$$\text{mean rate of reaction} = \frac{\text{quantity of reactant used}}{\text{time taken}}$$

$$\text{mean rate of reaction} = \frac{\text{quantity of product formed}}{\text{time taken}}$$

Measuring the Mass of a Reaction Mixture

The changing mass of a reaction mixture can be measured during a reaction. This method is particularly useful when gases, such as carbon dioxide, are given off. **Gas escapes during the reaction and the mass of the reaction mixture decreases.**


The mass can be measured at regular time intervals.



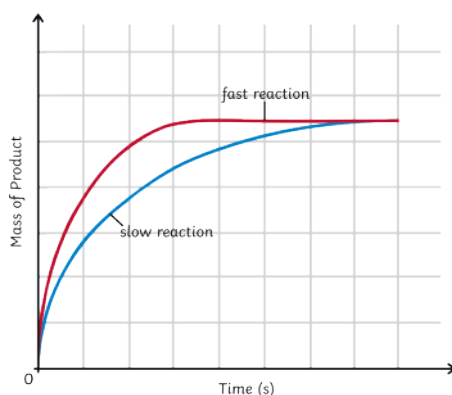
units = g/s or g/min

Measuring the Volume of a Reaction Mixture

The changing volume of a reaction mixture can be measured during a reaction. This method is particularly useful when gases, such as carbon dioxide, are given off. The gas can be collected and its volume measured at regular time intervals. Different types of measuring equipment can be used to collect the gas such as a gas syringe, measuring cylinder or upside-down burette.



units = cm³/s or cm³/min



Graphs are a useful way to **analyse** the results from a rate of reaction investigation. The graph above shows two lines, one red and one blue.

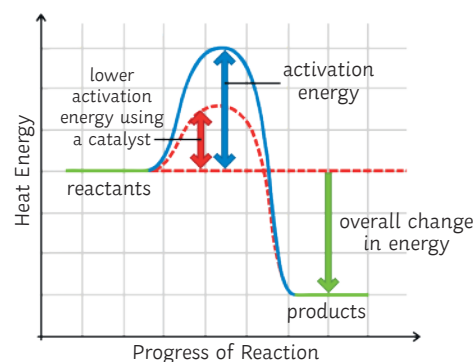
The red line represents a fast reaction and the blue line a slow reaction. We know the fast reaction occurs at a much faster rate as the line is steep. The fast reaction finishes before the slow reaction as the line plateaus sooner.

Factors Affecting the Rate of a Chemical Reaction

- concentration and pressure
- catalyst
- surface area
- temperature

The rate of a chemical reaction will be increased if there are more frequent successful collisions between reactant particles.

Catalyst



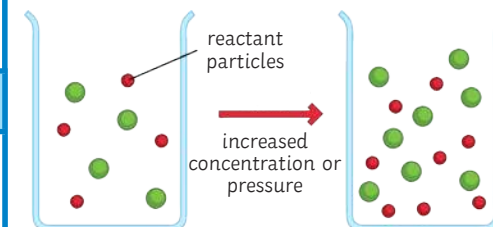
A catalyst is a **substance** that speeds up a chemical reaction without getting used up itself. Catalysts are able to offer an **alternative pathway** at a **lower activation energy**.

Biological catalysts are called **enzymes**.

When a catalyst is used in a chemical reaction (not all reactions have a catalyst that is suitable to use), the **frequency of collisions** is **unchanged**. More **particles** are able to react. The particles have **energy greater** than that of the **activation energy**. Consequently, there is an **increase** in the **rate successful of collisions**.

Concentration and Pressure

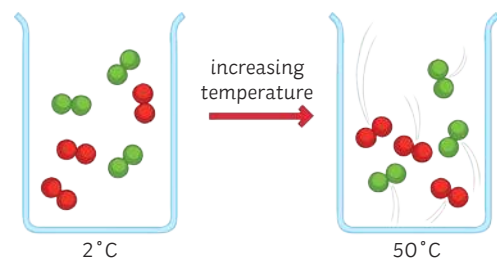
If the **number of reactant particles** in a given space is **doubled**, there will be **more frequent successful collisions** between reactant particles, therefore, **increasing the rate of reaction**.



AQA GCSE Chemistry (Combined Science) Unit 6: The Rate and Extent of Chemical Change

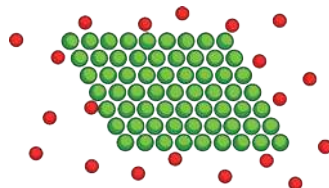
Temperature

When the temperature of the reaction mixture is increased, the reactant particles **gain kinetic energy** and move much more quickly. This results in **more frequent successful collisions** between the reactant particles, therefore, **increasing the rate of the reaction**.



Surface Area

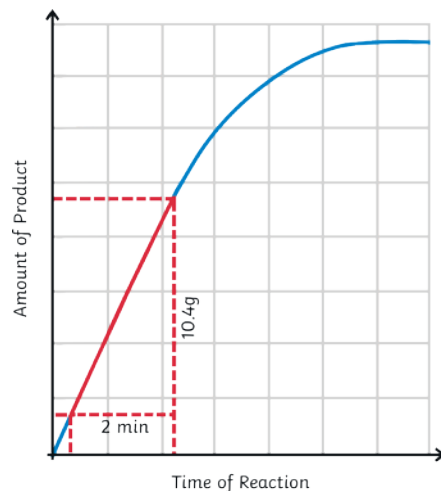
Large lumps of a solid have a **small surface area to volume ratio**. If the solid is broken up into smaller lumps or crushed into a powder, this will increase the surface area to volume ratio.



A larger area of the solid is now exposed to other reactant particles. This increases the frequency of successful collisions thus increasing the rate of reaction.

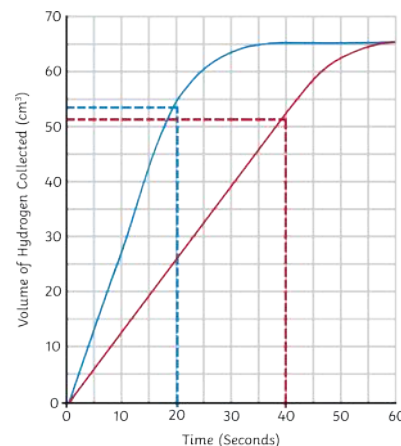
Calculating Gradient (Higher Tier Only) $\text{gradient} = \frac{y}{x}$

On the graph, draw construction lines on the part of the graph that has a straight line. Measure the values of x and y.



In the graph below, the gradient of the first line is much steeper than the second line. This indicates that a faster reaction is taking place. Remember, the steeper the line, the faster the reaction.

To calculate the reaction rate at a specific time period, construction lines must first be drawn on the straightest part of the graph.



For the first line, what is the rate of reaction at 20 seconds?

$$54 \div 20 = 2.7\text{cm}^3/\text{s}$$

For the second line, what is the rate of reaction at 40 seconds?

$$52 \div 40 = 1.3\text{cm}^3/\text{s}$$

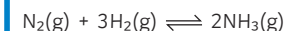
Dynamic Equilibrium

In a **closed system** (this means nothing can get in or out), a reversible reaction can reach **dynamic equilibrium**. This is where the **forward and reverse reactions** are occurring at the **same rate** and the **concentrations** of all the substances that are reacting remain constant.

Changing Conditions and the Effect on the Position of Equilibrium (Higher Tier Only)

The reaction between nitrogen and hydrogen to make ammonia is an industrial process called the Haber process. It requires a high temperature, high pressure and an iron catalyst.

The symbol equation for the reaction is as follows:



According to **Le Chatelier's Principle**, the position of equilibrium can be altered by changing the conditions of the reaction i.e. the pressure, concentration and/or the temperature. The **position** of the **equilibrium** will shift to **counteract** any changes made.

Increasing the **temperature** of the reaction in the forward direction (exothermic) will result in the equilibrium shifting in favour of the reverse direction (endothermic) to reduce the temperature.

From the equation, it is clear that on the **left-hand side**, there are **four molecules** and on the **right-hand side**, there are **two molecules**. If the **pressure** in the system were **increased**, the equilibrium **position would shift to the right** as there are fewer molecules. If the pressure in the system were **decreased**, the equilibrium **position would shift to the left** as there are a larger number of molecules.

If the **concentration** of one of the **reactants** were **increased**, then the equilibrium position would move in **favour of the products**. This would result in more product being produced. If the concentration of the **products** were **decreased**, equilibrium would shift to **favour the products**. More reactants would react until equilibrium is reached.

AQA GCSE Chemistry (Combined Science) Unit 6: The Rate and Extent of Chemical Change

Reversible Reactions

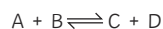
A reversible reaction is one in which the **reactants form products**. The products are then able to react together to **reform the reactants**.

For example:

A reacts with B to form C and D.

C and D are able to react to form A and B.

The equation would be as follows (where the **double arrow symbol** represents a **reversible reaction** is taking place):

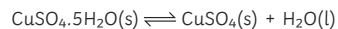


The **forward reaction** goes to the **left** and the **backwards reaction** goes to the **right**. For example, if the forward reaction is exothermic then the backward reaction will be endothermic. The amount of energy that is transferred is the same for both the forward and reverse reaction.

Hydrated copper sulfate is a blue substance. We say that the copper sulfate is hydrated as it **contains water**. The copper sulfate is heated and the water evaporates leaving a white substance known as **anhydrous** copper sulfate. Anhydrous meaning **no water**.

The word equation for the reaction is as follows:

hydrated copper sulfate \rightleftharpoons anhydrous copper sulfate + water



The reaction can be reversed when water is added to the anhydrous copper sulfate.

Required Practical 5: Measuring the Production of a Gas

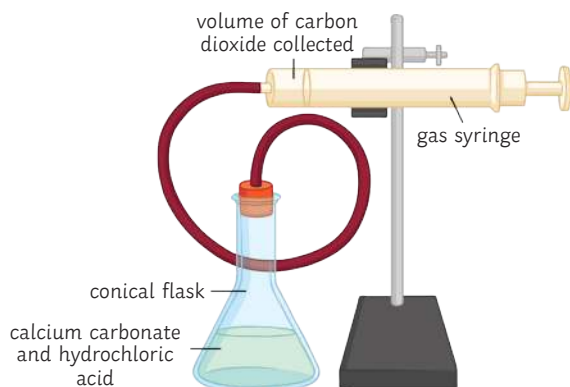
This method outlines one way to carry out an investigation to collect a gas from a chemical reaction.

The practical involves changing the concentration of hydrochloric acid and measuring the volume of carbon dioxide gas produced when the acid reacts with calcium carbonate.

The word equation for the reaction is as follows:

calcium carbonate + hydrochloric acid \rightarrow calcium chloride + water + carbon dioxide

The symbol equation for the reaction is:



Method

Step 1 – Clamp a gas syringe to a retort stand using a boss and clamp. Ensure the syringe is a quarter of the way from the top of the stand. Place the delivery tube to the end of the gas syringe.

Step 2 – Measure out 50ml of hydrochloric acid using a measuring cylinder and pour into a conical flask.

Step 3 – Using a top pan balance, measure out 0.5g of powdered calcium carbonate and place in the conical flask.

Step 4 – Immediately connect the bung and delivery tube to the conical flask. Start the stopwatch.

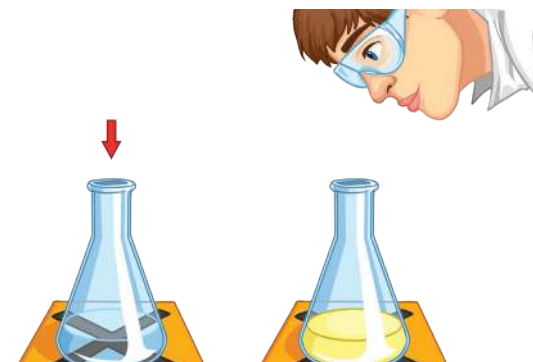
Step 5 – Record the volume of carbon dioxide gas produced every 10 seconds.

Step 6 – When the reaction has finished and there are no more bubbles of gas being produced, clean the equipment and repeat using four other different concentrations of hydrochloric acid.

When analysing the results from the practical investigation, plot a graph of Time (s) against Volume of Gas Produced (cm^3). Draw a curve of best fit through the points. A graph should be plotted for each concentration of acid.

Calculate the mean rate of reaction (cm^3/s) for each concentration of acid used. This can be calculated by dividing the total mass of gas produced (cm^3) by the reaction time (s).

Required Practical 5: Investigating a Change in Colour




This method outlines one way to carry out an investigation into the effect of increased temperature on the rate of a reaction.

The word equation for this reaction is as follows:

sodium thiosulfate + hydrochloric acid \rightarrow sodium chloride + water + sulfur dioxide + sulfur

The symbol equation for this reaction is:



The reaction between sodium thiosulfate and hydrochloric acid produces a **precipitate**. **Sulfur** is responsible for the formation of the precipitate. A precipitate is a **solid** that is formed in a solution. It is the formation of this precipitate that causes the reaction mixture to become **cloudy**; the cloudiness is a way to measure the **reaction time**.

Method

Sodium thiosulfate from three different temperatures may be used, for example, ice cold, room temperature and hot.

Step 1 – Place a black cross on a white tile.

Step 2 – Using the first temperature, measure out 35cm^3 of sodium thiosulfate using a measuring cylinder. Place the liquid in a conical flask and position over the black cross on the white tile.

Step 3 – Measure out 5cm^3 of water and 10cm^3 of hydrochloric acid in separate measuring cylinders.

Step 4 – Pour the water and acid into the conical flask.

Step 5 – Pour the measured amount of sodium thiosulfate into the conical flask and immediately start the stopwatch.

Step 6 – Look down through the conical flask to the black cross below. When the black cross is no longer visible, stop the stopwatch and record the results in a table.

Step 7 – Repeat the steps with the remaining temperatures of sodium thiosulfate.

